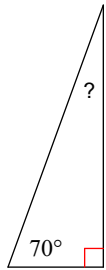


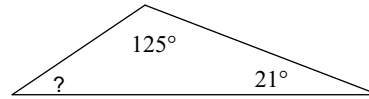
Triangles and Quadrilaterals Practice

Find the measure of each angle indicated.

1)

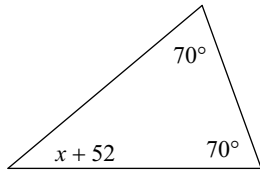


2)

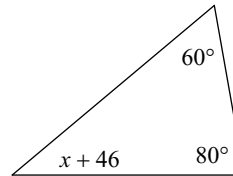


Solve for  $x$ .

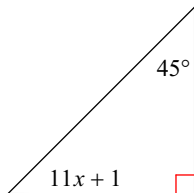
3)



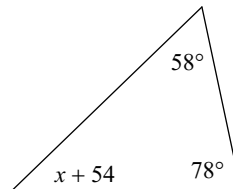
4)



5)

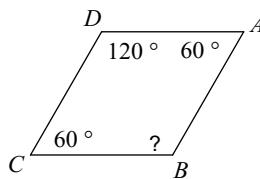


6)

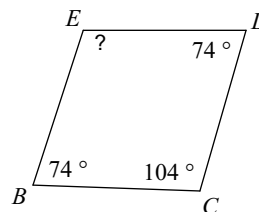


Find the measure of each angle indicated.

7)

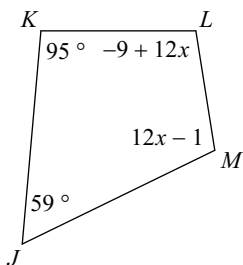


8)

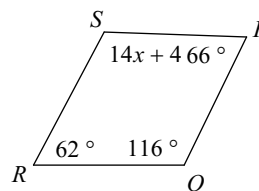


Solve for  $x$ .

9)



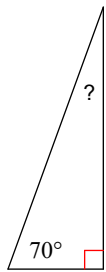
10)



Triangles and Quadrilaterals Practice

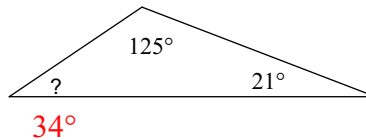
Find the measure of each angle indicated.

1)



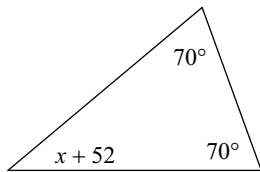
20°

2)



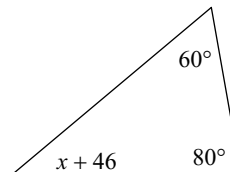
Solve for  $x$ .

3)



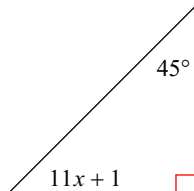
-12

4)



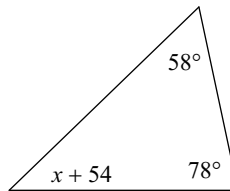
-6

5)



4

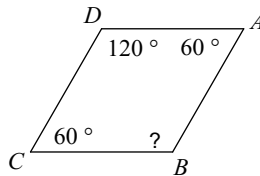
6)



-10

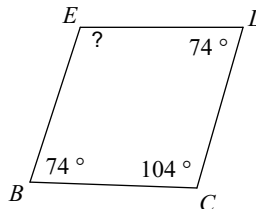
Find the measure of each angle indicated.

7)



120°

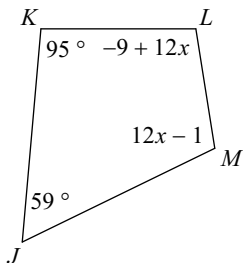
8)



108°

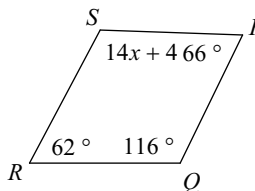
Solve for  $x$ .

9)



9

10)



8