

Name _____

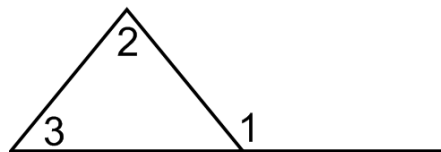
Date _____

Math 8

Geometry 10

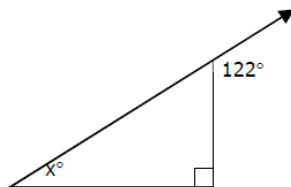
Exterior Angle Theorem

$$m\angle 1 = m\angle 2 + m\angle 3$$

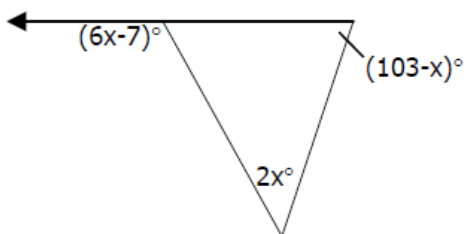


Examples:

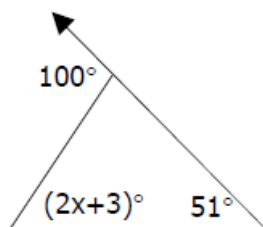
1. Solve for x .



2. Solve for x .



3. Solve for x .



4. Solve for x .

